
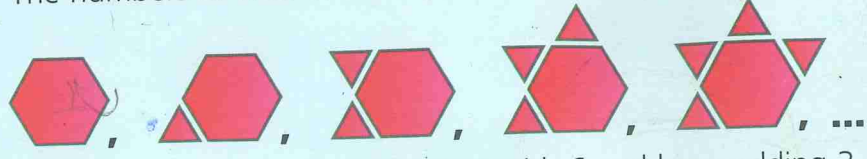


2:07 Making number patterns

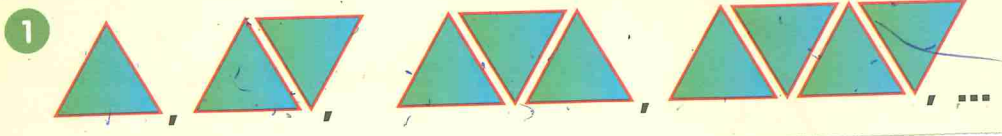


The numbers of lines in these pictures form a pattern.



To make the number pattern, start with 6 and keep adding 3.

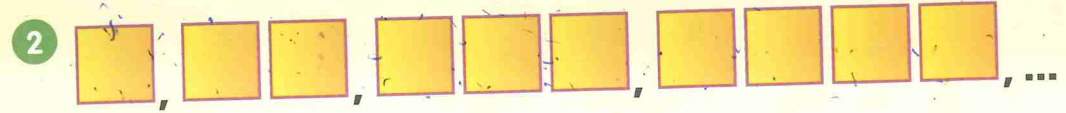
For each row of pictures, we count the number of lines in each part



a The number pattern is:

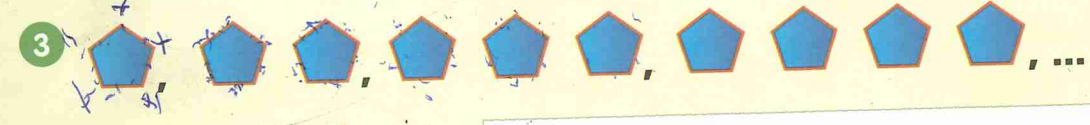
b To make the number pattern,

Can you work out the next term in each pattern?



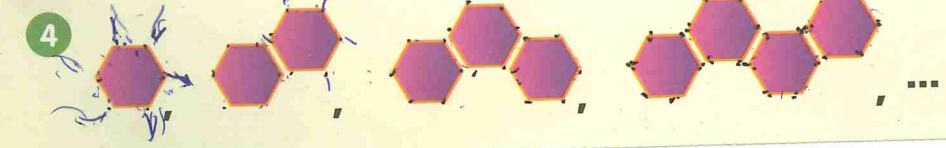
a The number pattern is:

b To make the number pattern,



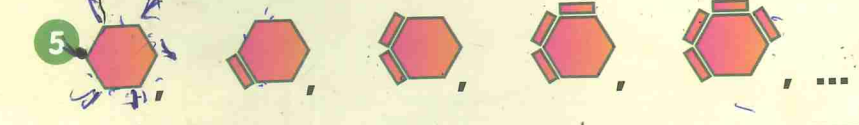
a The number pattern is:

b To make the number pattern,



a The number pattern is:

b To make the number pattern,



a The number pattern is:

b To make the number pattern,



1 Next term
=

2 Next term
=

3 Next term
=

4 Next term
=

5 Next term
=

Can you make up your own number pattern?