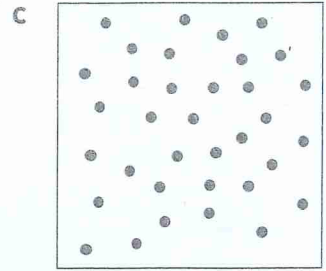
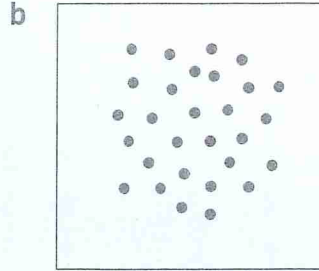
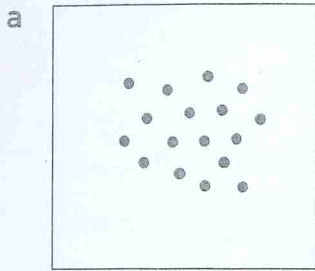


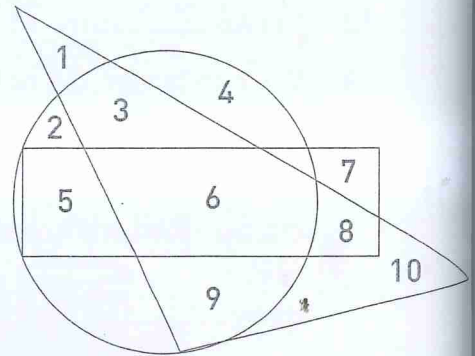
Unit 7 Fun Spot!

- 1 Look at the dots in the squares below.
Estimate the number of dots in each square, then check by counting.

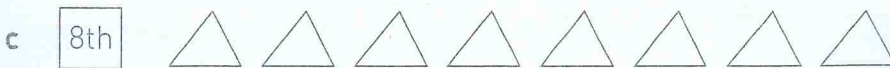
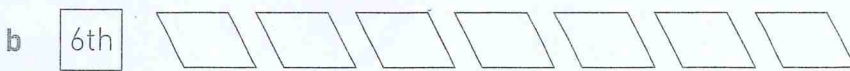
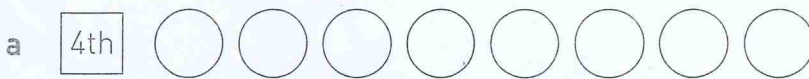


- 2 Which numbers are:

- a inside the circle but not in the rectangle or triangle? _____
 b inside the triangle but not in the circle or rectangle? _____
 c inside the rectangle, circle and triangle? _____



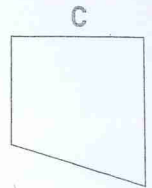
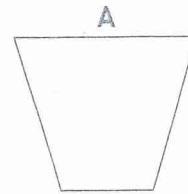
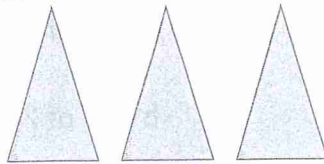
- 3 Colour the shape in the right position.




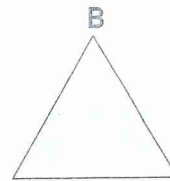
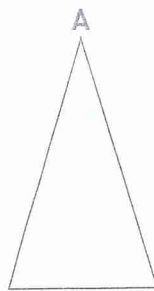
- 4 A hamburger cost Petra \$1.80 and she paid the exact amount. Colour the coins she used.



- 5 Colour the shape that could be made from these three triangles.



- 6 Colour the triangle that has three equal sides and three equal angles.



- 7 Which other card in each row shows the same fraction as the first one in that row?

