

Unit 8 Revision A

- 1 a $3 + 2$ _____ b $8 - 3$ _____
 c $15 + 4$ _____ d $12 - 8$ _____
 e $1 + 16$ _____ f $20 - 11$ _____
 g $24 + 17$ _____ h $50 - 25$ _____

- 2 Complete:
 a 13, 15, 17, _____
 b 99, 98, _____, 96
 c 24, 26, 28, _____
 d 30, 40, 50, _____
 e 15, 20, _____, 30
 f 22, 32, _____, 52

- 3 Double:
 a 8 _____ b 5 _____
 c 6 _____ d 9 _____


- 4 Half of:
 a 14 _____ b 4 _____
 c 20 _____ d 10 _____

- 5 a 3 groups of 1 _____
 b 2 rows of 3 _____
 c 5 piles of 2 _____
 d 1 array of 7 _____

- 6 Circle the larger in each:
 a 6 or 16
 b 121 or 122
 c 5 or 50
 d 365 or 356

- 7 How many digits in:
 a 37 _____
 b 90 _____

8 Label these shapes:



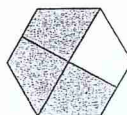
9 Write in numerals:

- a sixteen _____
 b six _____
 c sixty _____
 d eight hundred and two _____

10 Write in words:

- a 22 _____
 b 44 _____
 c 89 _____
 d 307 _____

11 What part of this shape is coloured?



_____ out of _____

- 12 a 1 ten + 9 ones _____
 b 4 tens + 2 ones _____
 c 3 tens + 7 ones _____
 d 5 hundreds + 2 tens + 4 ones _____

13 a $6 + 8 = 14$ so $14 - 8 =$

b $3 \times 4 = 10 +$

c $10 + 10 =$ $\times 5$



Revision B

1 True or false:

- a $3 + 7 = 11$ _____
- b $1 + 14 = 15$ _____
- c $19 + 7 = 25$ _____
- d $30 - 16 = 4$ _____

2 Complete:

- a $6 \times 3 = \square \times 2$
- b $4 \times \square = 2 \times 10$
- c $6 + 8 = 7 + \square$
- d $\square + 5 = 11 + 9$

- a $4 \times 2 + 3$ _____
- b $5 \times 4 - 5$ _____
- c $6 \times 5 + 3$ _____
- d $2 \times 10 - 7$ _____

Share:


- a 50c between 2 girls _____
- b \$2 between 4 boys _____
- c 15 apples between 3 boxes _____

Colour to show:

a 5 groups of 2



b 3 groups of 4



Colour the heavier in each:



7 Circle the shorter:

- a a path or a highway
- b a new pencil or a toothpick
- c a car or a bus

8 On each face show the time given:

a	b	c
two thirty	11 o'clock	half past 8
d	e	f
half past 10	12 o'clock	six thirty

9 Circle the smaller surface area:

- a a Base 10 long or your ruler
- b a metre ruler or a popstick
- c this book or the classroom

10 Which would hold more:

- a a cup or a big jug?
- b a milk carton or a mug?
- c a medicine cup or a frypan?

11 Draw lines to match:

- | | |
|---------|-------------------|
| a 4:30 | eleven thirty |
| b 11:30 | half past 2 |
| c 2:30 | 30 minutes past 4 |