
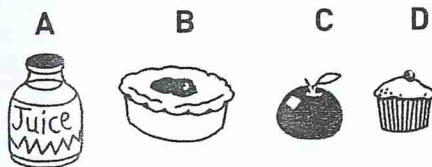



Unit 7 Fun Spot!

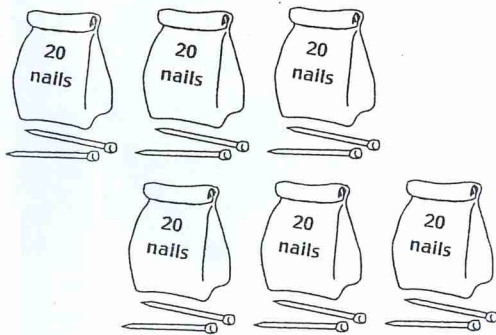
- 1 The market starts at 9 o'clock. It will last four hours. Colour the clock that shows the time the market will end.




- 2 Sam bought 2 things at the food stall. He spent \$1.60. Colour the two things he bought.



- 3 Nails are sold in bags of 20. Colour in enough bags and single nails to show exactly 68 nails.



- 4 Liew was standing facing the trees. He then looked to his right. Circle the thing he saw.



- 5 $6 + 6 + 6 + 6$ is equal to:

- A $4 + 6$
 B $6 \times 6 \times 6 \times 6$
 C 4×6
 D $6 \div 4$

- 6 Jo put some balls into rings like this!

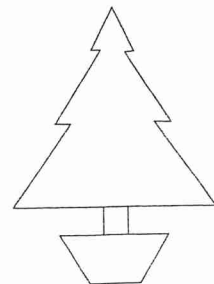


What number sentence did she make?

- A $5 + 4 = 9$
 B $20 - 5 = 15$
 C $4 \times 5 = 20$

- 7 Kay sold pine trees. Which shape best matches the pine tree shape?

- A square
 B circle
 C triangle
 D rectangle





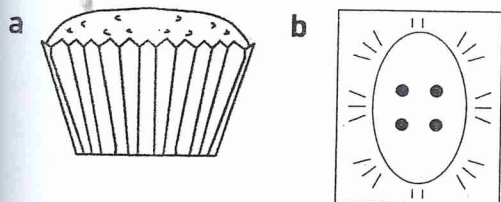
- 8 A hamburger costs \$2.60.
Trang paid the exact amount.
Colour the coins she used.




- 9 The gum tree is 120 cm high.
The wattle tree is 5 cm taller.
How tall is the wattle tree?

- A 120 cm
- B 122 cm
- C 125 cm
- D 150 cm

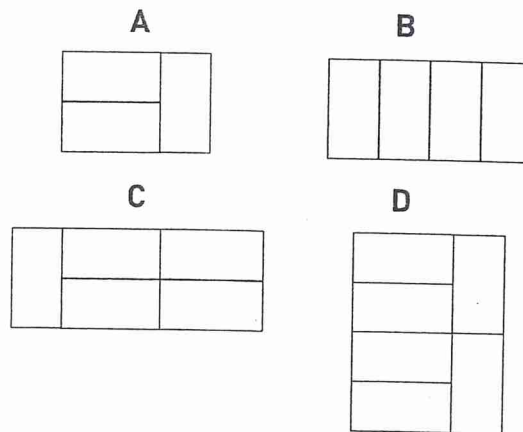
- 10 Michael bought a cake and a poster.
Rule all lines of symmetry on each.



- 11 Matthew made a sign for the book stall.
He wanted to make the largest number from the numeral cards.
Colour the number he should put in first.



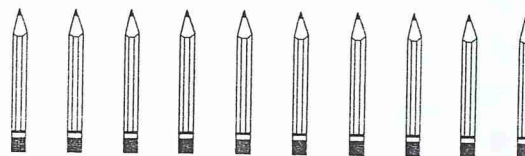
- 12 The children at the cake stall covered the table with plastic.
Which group of tables needed the most plastic?



- 13 Grandma made 20 toffees.
If we sold 13, how many are left?

- A 3
- B 7
- C 10
- D 17

- 14 Circle the fifth pencil from the left.



- 15 The market raised \$118.
Dave wrote \$118 in words.
Which words did he write?
- A one hundred and eight dollars
 - B one hundred and eighteen dollars
 - C one hundred and eighty dollars
 - D one hundred and eighty-one dollars

