

Unit 6

A

- 1 $8 + 4$ _____
- 2 9 add 6 _____
- 3 $13 - 9$ _____
- 4 16 minus 8 _____
- 5 9 rows of 10 _____
- 6 Skip count by 4s: 16, 20, 24, 28, _____
- 7 12 shared by 3 _____
- 8 Colour groups of 2:

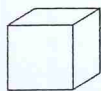


- 9 $30 + 6$ _____
- 10 $3 \times 4 = 4 + 4 + \square$
- 11 Even number before 30 _____
- 12 Colour half of:



- 13 Cost of 6 ten-cent cakes _____
- 14 Month after December _____
- 15 On this cube, colour:

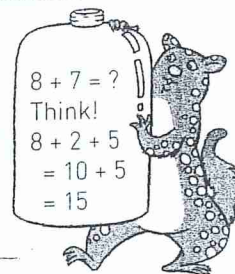
- a the top red
- b the front blue



15

B

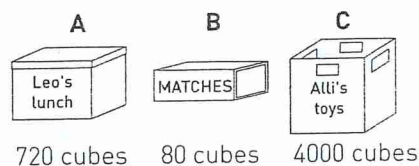
- 1 $9 + 8$ _____
- 2 $16 + 9$ _____
- 3 $40 - 19$ _____
- 4 57 subtract 25 _____
- 5 7 heaps of 4 books _____
- 6 4 boxes of 9 pencils _____
- 7 How many groups of 2 in 14? _____
- 8 Share 18 between 2 _____
- 9 $400 + 80 + 7$ _____



- 10 $5 + 5 + 5 + 5 = \square \times 5$
- 11 What number follows 149? _____
- 12 Colour 3 fifths:



- 13 Change from \$1 if I spent 85c _____
- 14 Cubes were used to measure the volume of each box. Colour the container with the greatest volume:



- 15 Which shape has 4 equal sides? _____

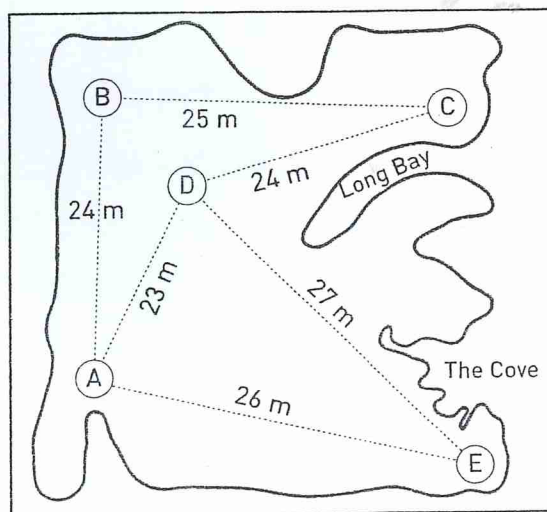


15

- 1 Joey has lost his mum. How far did he hop from:
 - a A to B to C? _____
 - b D to E to A? _____
 - c A to D to C? _____
 - d B to C to D? _____



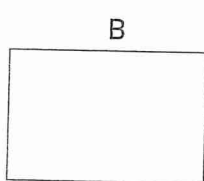

- 2 Draw:
 - a a blue line on the longest distance
 - b an island in The Cove
 - c his mum in the middle of triangle ADE




C

- 1 17 add 43 _____
- 2 23 + 47 _____
- 3 43 - 26 _____
- 4 Deduct 16 from 58 _____
- 5 8 rows of 5 _____
- 6 4 tanks of 5 fish _____
- 7 20 legs, how many chairs? _____
- 8 Share 22 flowers into 2 vases _____
- 9 300 + 7 _____
- 10 $6 + 8 = 14$ so $14 - 8 =$
- 11 24, 28, _____, 36, 40
- 12 Shade $\frac{1}{2}$:


- 13 $15c + 25c + 10c$ _____
- 14 Pattern the smaller area with blue squares:




- 15 Is a rectangle a quadrilateral?




Matt is in Column 3, Row 4.



Position is the location of an object. Coordinates are letters or numbers that show position.



The bottom coordinate is always read before the side coordinate.



Give the position of:

- a Lou _____
- b Mike _____
- c Alli _____
- d Leo _____

5	Leo	David	<input type="text"/>	Amy
4	<input type="text"/>	Alli	Matt	Paul
Row 3	Lou	<input type="text"/>	Mike	Trang
2	<input type="text"/>	<input type="text"/>	Mario	<input type="text"/>
1	Tom	<input type="text"/>	Sam	Mel
	1	2	3	4

Write Alan in Column 2, Row 3.

Draw the teacher in Column 4, Row 2.

D

- 1 38 + 22 _____
- 2 35 plus 25 _____
- 3 Subtract 18 from 79 _____
- 4 70 - 55 _____
- 5 8×4 _____
- 6 6 bunches of 4 flowers _____
- 7 16 wheels, how many cars? _____
- 8 Share 24 cakes into 2 tins _____
- 9 1000 + 50 + 6 _____
- 10 $9 + 7 = 16$ so $16 -$ = 9
- 11 44, 48, _____, 56, 60
- 12 Which is larger, one half or one quarter? _____
- 13 $35c + 25c$ _____
- 14 Month before November _____
- 15 Use these words to label the shape:
height
width
length



$$\begin{aligned} 26 + 12 &= ? \\ 20 + 10 + 6 + 2 \\ &= 30 + 8 \\ &= 38 \end{aligned}$$