
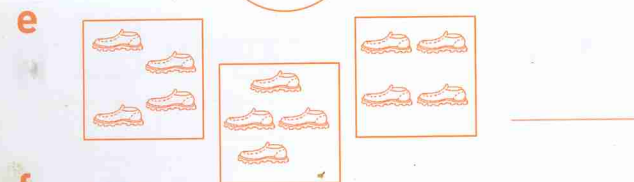
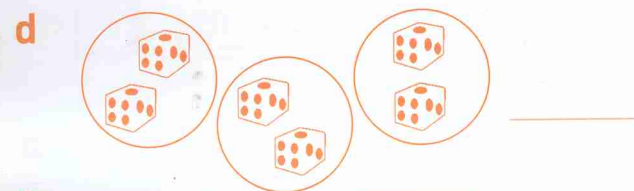
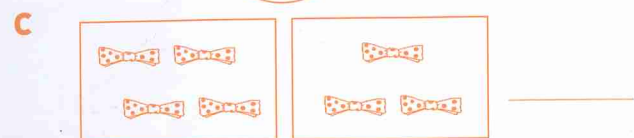
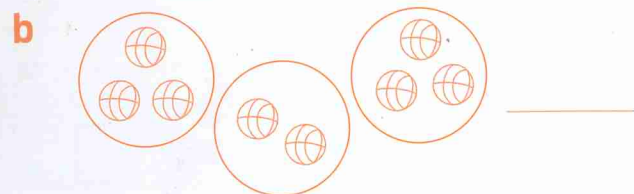
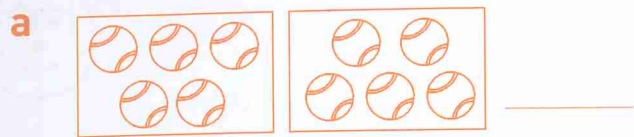


Unit 7


A

1 Is this a fair share?



B

1 Colour coins to show:



Odd numbers end in 1, 3, 5, 7 or 9.

odd numbers
11, 23, 35



1 Circle the odd numbers.

1	2	3	4	5	6	7	8	9	10
11	12	13	14	15	16	17	18	19	20
21	22	23	24	25	26	27	28	29	30
31	32	33	34	35	36	37	38	39	40
41	42	43	44	45	46	47	48	49	50

C


1 How many corners?

a



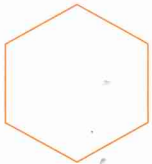
_____ corners

b



_____ corners

c




_____ corners

d



_____ corners

e



_____ corners

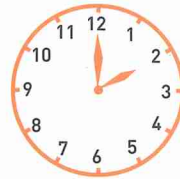
D

1 Write the time shown.

The big hand is the minute hand.

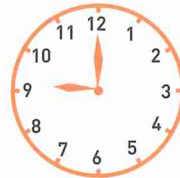


a



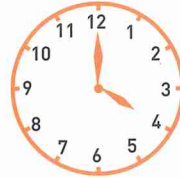
_____ o'clock

b



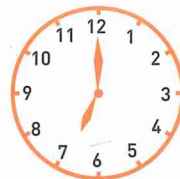
_____ o'clock

c



_____ o'clock

d



_____ o'clock

e



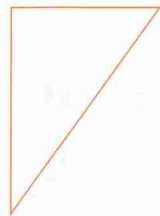
_____ o'clock

1 How many sides has each shape?

a




b



c



d



A triangle has three sides.

