



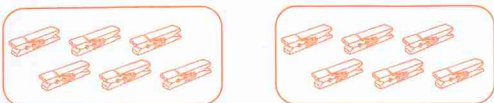
# Unit 6


## A


1 Complete.

a    
 groups of  =

b    
 groups of  =

c    
 groups of  =

d    
 groups of  =

e    
 groups of  =

## B

1 Write the next number.

2 groups of 2 = 4.



a  14  16  18

b  10  15  20


c  30  40  50

d  26  28  30

e  35  40  45

f  60  70  80

Even numbers end in 0, 2, 4, 6 or 8.







1 Circle the even numbers.

1	2	3	4	5	6	7	8	9	10
11	12	13	14	15	16	17	18	19	20
21	22	23	24	25	26	27	28	29	30
31	32	33	34	35	36	37	38	39	40
41	42	43	44	45	46	47	48	49	50

**C**

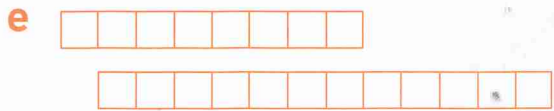
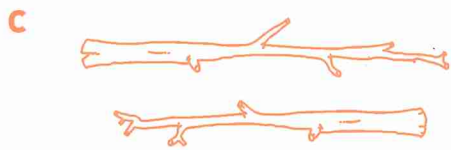


**1** Draw a line of symmetry.




**D**

**1** Colour the longer.

Here is a line of symmetry.



**1** Colour the ovals.



This is an oval.

