

# Unit 4

## A

1  +  = \_\_\_\_\_

2  $8 + 7 =$  \_\_\_\_\_

3  -  = \_\_\_\_\_

4 17 subtract 7 \_\_\_\_\_

5 Skip count by twos: 28, \_\_\_\_\_, \_\_\_\_\_, \_\_\_\_\_

6 5 rows of 10 \_\_\_\_\_

7 10 shared into 2 \_\_\_\_\_

8 Circle groups of 3:



9 

3	tens	6	ones
---	------	---	------

 \_\_\_\_\_

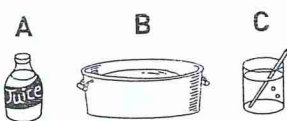
10  $8 + 7 = 15$  so  $15 - 8 =$

11 Odd number after 29 \_\_\_\_\_

12 What part of this shape is coloured? 

13 5 lots of 10c \_\_\_\_\_

14 Tick the one that holds the most:



15 Which shape has 4 equal sides?

## B

1  $8 + 14 =$  \_\_\_\_\_

2 36 plus 25 \_\_\_\_\_

3  $40 - 18 =$  \_\_\_\_\_

4 25 minus 17 \_\_\_\_\_

5 4 rows of 2 girls \_\_\_\_\_

6 2 groups of 4 boys \_\_\_\_\_

7 16 shared into 4 \_\_\_\_\_

8 10 eyes. How many faces? \_\_\_\_\_

9 Numeral for two hundred and six \_\_\_\_\_

10  $13 + 7 = 20$  so  $20 - 7 =$

11 What number follows 79? \_\_\_\_\_

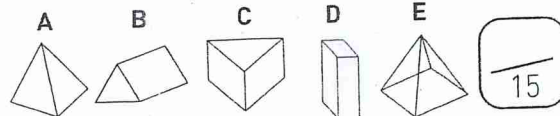
12 Which one is bigger, one half or one whole? \_\_\_\_\_

13 3 lots of 20c \_\_\_\_\_

14 Use words to write the time:



15 Tick the pyramids:



I'll have the whole glass please.



Split the tens and ones. Add the tens, add the ones, then find their total.

a  $25 + 34 = 20 + 30 + 5 + 4 =$  \_\_\_\_\_

b  $36 + 23 =$  \_\_\_\_\_ = \_\_\_\_\_

c  $28 + 19 =$  \_\_\_\_\_ = \_\_\_\_\_

d  $32 + 28 =$  \_\_\_\_\_ = \_\_\_\_\_

e  $46 + 27 =$  \_\_\_\_\_ = \_\_\_\_\_

f  $38 + 43 =$  \_\_\_\_\_ = \_\_\_\_\_


g  $29 + 47 =$  \_\_\_\_\_ = \_\_\_\_\_

h  $37 + 58 =$  \_\_\_\_\_ = \_\_\_\_\_

Split the tens and ones first.

Think!

$42 + 39$  is  
 $40 + 30 = 70$  and  
 $2 + 9 = 11$  so  
 $70 + 11 = 81$





C

- 17 + 33 \_\_\_\_\_
- 19 plus 41 \_\_\_\_\_
- 44 - 32 \_\_\_\_\_
- Difference between 56 and 26 \_\_\_\_\_
- Legs on 3 dingoes \_\_\_\_\_
- 8 rows of 4 \_\_\_\_\_
- Share 12 wombats in 2 holes \_\_\_\_\_
- Colour groups of 2:



Write the number for 15 tens \_\_\_\_\_

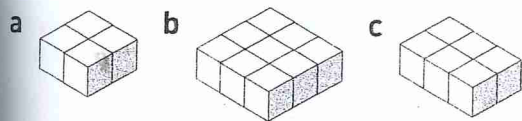
$3 \times 5 = 10 + \square$

16, 20, 24, 28, \_\_\_\_\_

2 halves = 1 whole. True/false \_\_\_\_\_

Sam had 25c and saved 50c.  
Total now? \_\_\_\_\_

How many blocks in each:



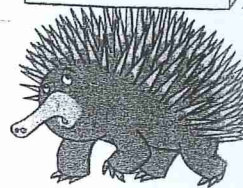
A cube has \_\_\_\_\_ faces.

$\frac{\quad}{15}$

D

- 1 38 + 32 \_\_\_\_\_
- 2 64 and 36 more \_\_\_\_\_
- 3 32 less than 55 \_\_\_\_\_
- 4 69 - 39 \_\_\_\_\_
- 5 7 groups of 10 \_\_\_\_\_
- 6 9 branches with 2 budgies on each \_\_\_\_\_
- 7 16 legs, how many emus? \_\_\_\_\_
- 8 Share 16 platypuses into 2 dams \_\_\_\_\_
- 9 Write the number for 10 tens \_\_\_\_\_

A tessellation is made by identical shapes fitting together without gaps or overlaps.



10  $6 \times 3 = 10 + \square$

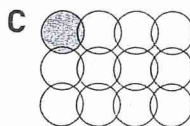
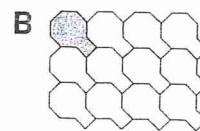
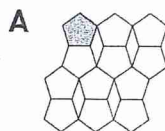
11 32, 36, 40, \_\_\_\_\_, 48

12 2 quarters = \_\_\_\_\_ half

13 Cost of 4 pens at 50c each \_\_\_\_\_

14 Month before January \_\_\_\_\_

15 Colour the picture where the shaded shape tessellates:



$\frac{\quad}{15}$



There are 6 budgies on each branch.  
How many budgies altogether?

$$\begin{array}{r} 6 \text{ budgies} \\ \times 2 \text{ branches} \\ \hline 12 \text{ budgies altogether} \end{array}$$

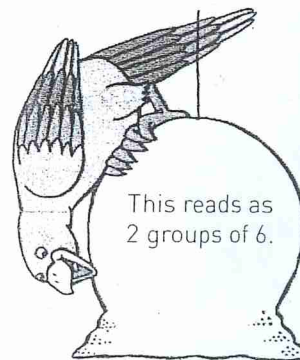
Model these algorithms and record your answer:

a 6 emus in a row      6  
2 rows                     $\times 2$   
How many emus?      \_\_\_\_\_

b 10 owls in a row      10  
5 rows                     $\times 5$   
How many owls?      \_\_\_\_\_

d  $\begin{array}{r} 6 \\ \times 1 \\ \hline \end{array}$       e  $\begin{array}{r} 8 \\ \times 2 \\ \hline \end{array}$       f  $\begin{array}{r} 4 \\ \times 4 \\ \hline \end{array}$       g  $\begin{array}{r} 6 \\ \times 5 \\ \hline \end{array}$       h  $\begin{array}{r} 5 \\ \times 4 \\ \hline \end{array}$

i  $5 \times 10 = \square$       j  $10 \times 4 = \square$       k  $5 \times 5 = \square$



This reads as 2 groups of 6.