

Unit 5

A

1 Complete.



$$\square - \square = \square$$



$$\square - \square = \square$$



$$\square - \square = \square$$








$$\square - \square = \square$$



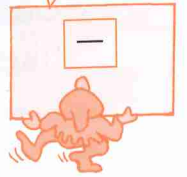
$$\square - \square = \square$$

B

1 Write the numeral for:



This sign means 'take away'.



I colour
5, 10, 15,

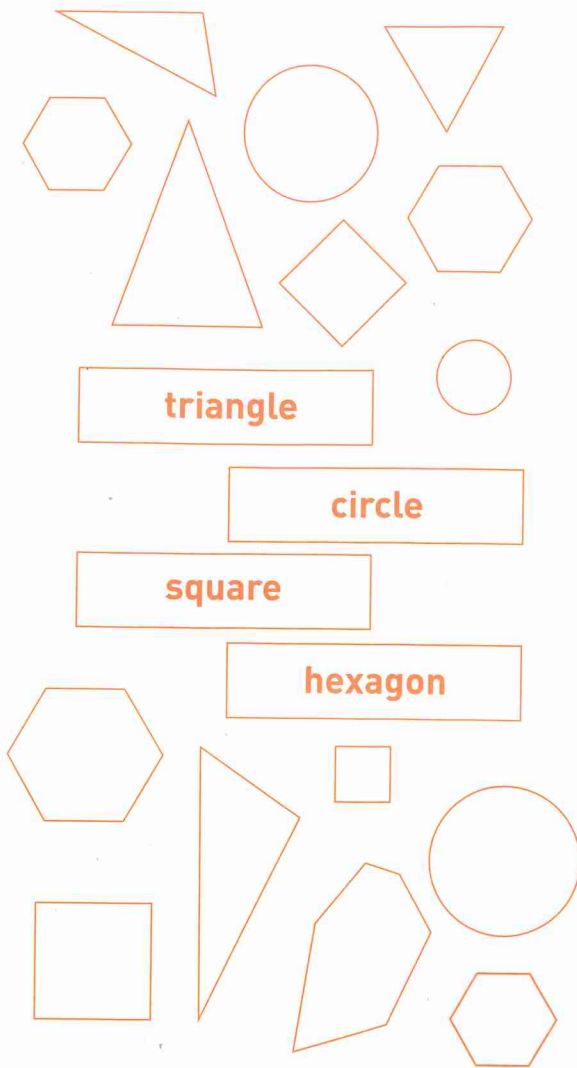


- Count by fives and colour each number counted.
- Count by tens.

1	2	3	4	5	6	7	8	9	10
11	12	13	14	15	16	17	18	19	20
21	22	23	24	25	26	27	28	29	30
31	32	33	34	35	36	37	38	39	40
41	42	43	44	45	46	47	48	49	50


C

1 Colour to match.



D

1 Colour the larger area.



1 Circle the objects that could roll.

