




# Unit 3


**A**


1 Complete.

a   
 plus  =

b   
 plus  =

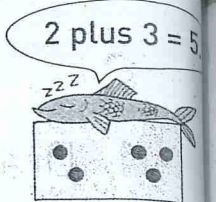
c   
 plus  =

d   
 plus  =

e   
 plus  =

**B**

1 Write the numeral for:



a 

●	●	●	●	●	●	●	●	●	●
●	●								

b 

●	●	●	●	●	●	●	●	●	●
●	●	●	●						

c 

●	●	●	●	●	●	●	●	●	●
●	●	●							

d 

●	●	●	●	●	●	●	●	●	●
●	●	●	●	●	●				



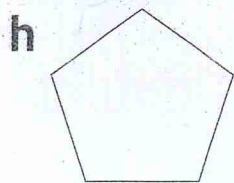




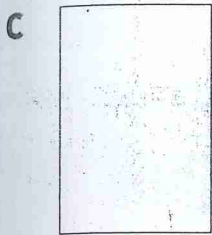

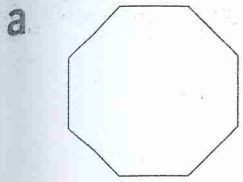
e 

●	●	●	●	●	●	●	●	●	●
●	●	●	●	●					

3 = 5.

**C**

1 Colour the squares.



**D**

1 Colour objects that would be longer than your finger.

A square has four equal sides.

