


Unit 3

If I know one table fact, I also know three related facts.




A

- 1 $40 + 36$
- 2 $90 - 8$
- 3 5×7
- 4 $40 \div 8$
- 5 $\$3.45 + \2.35
- 6 Place value of 3 in 2 309
- 7 0.84 as a fraction
- 8 Is 9 642 greater than 9 462?
- 9 Fifths in $\frac{4}{5}$
- 10 $\frac{1}{2}$ of 24
- 11 Roman numeral for 139
- 12 Is 35 divisible by 7?
- 13 Even number after 699
- 14 $25 + \square = 59$
- 15 Millimetres in 7 cm
- 16 Perimeter of rectangle 8 m by 3 m
- 17 Millilitres in 6 L
- 18 Grams in 9 kg
- 19 28 past 11 as digital time
- 20 How many right angles has a rectangle? 20

B

- 1 $39 + 26$
- 2 $54 - 28$
- 3 8×7
- 4 $63 \div 9$
- 5 $\$2.45 + \3.95
- 6 $8\ 000 + 500 + 40 + 9$
- 7 0.54 as a percentage
- 8 Round off 25 683 to nearest thousand
- 9 $\frac{10}{3}$ as a mixed number
- 10 $\frac{1}{4}$ of 24
- 11 What number is 9 less than 2 456?
- 12 All factors of 30
- 13 6^2
- 14 120, 140, 160, 180,
- 15 Centimetres in 39 mm
- 16 Area of square with 8 cm sides
- 17 Litres in 3 000 mL
- 18 Kilograms in 9 000 g
- 19 Minutes from 2:37 to 3:04
- 20 A triangular pyramid has 20 faces.

Write the decimal for the part coloured in each hundred square.



1		2		3	
4		5		6	

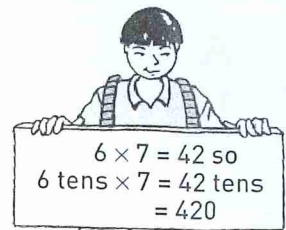
Hint: Final zeros in a decimal may be omitted e.g. 0.60 is 0.6. 60 hundredths is the same as 6 tenths.

C

- 1 $58 + 6$
- 2 $35 - 19$
- 3 8×8
- 4 $72 \div 9$
- 5 $\$2.95 + \1.35
- 6 Place value of 4 in 64 297
- 7 0.95 as a percentage
- 8 Round off 45 678 to nearest thousand
- 9 $2\frac{3}{5}$ as improper fraction
- 10 $\frac{1}{10}$ of 90
- 11 What number is 20 more than 3 645?
- 12 All factors of 20
- 13 3 squared
- 14 $14 + \square = 35$
- 15 Millimetres in 4.7 cm
- 16 Area of rectangle 3 cm by 9 cm
- 17 Millilitres in 8 L
- 18 Kilograms in 7 000 g
- 19 Use am or pm to write 6:51 evening
- 20 A hexagonal pyramid has _____ faces. 20

D

- 1 $154 + 20$
- 2 $245 - 30$
- 3 90×6
- 4 $320 \div 8$
- 5 $\$6.20 - \1.35
- 6 Expanded notation for 15 729
- 7 0.9 as a percentage
- 8 Round off 457 964 to nearest ten thousand
- 9 $\frac{14}{3}$ as a mixed number
- 10 $\frac{3}{5}$ of 35
- 11 What number is 100 more than 8 457?
- 12 Is 6 a composite number?
- 13 8^2
- 14 $\square + 28 = 52$
- 15 Millimetres in 9.6 cm
- 16 Area of rectangle 3 cm by 8 cm
- 17 Millilitres in 7.5 L
- 18 Grams in 4.8 kg
- 19 Write 2:24 am in analog time
- 20 A cube has _____ corners. 20



Complete the multiplication grids.

1

\times	8	6	9	5	7	4
6						
8						
9						
7						

2

\times	9	4	7	5	8	6
10						
20						
30						
40						

